










# Compare the Fruit

I can calculate the total combined mass and difference of several items.



						
blueberry 5g	strawberry 10g	apricot 30g	apple 80g	peach 100g	banana 150g	melon 2kg

1) Use the correct symbol (<, > or =) to compare these items:

2 strawberries and 1 peach		1 banana and 4 blueberries
6 blueberries, 3 apricots and 1 peach		4 blueberries, 1 banana, 5 strawberries
1 melon		12 strawberries and 8 peaches

2) Calculate the difference in mass between:

a)	1 apple and 7 strawberries	1 apricot and 5 blueberries	
b)	3 bananas and 3 apricots	2 strawberries and 3 peaches	
c)	4 apricots and 3 peaches	4 apples and 7 blueberries	



# Compare the Fruit Answers

I can calculate the total combined mass and difference of several items.



- 1) Use the correct symbol (<, > or =) to compare these items.

2 strawberries and 1 peach	<	1 banana and 4 blueberries
6 blueberries, 3 apricots and 1 peach	=	4 blueberries, 1 banana, 5 strawberries
1 melon	>	12 strawberries and 8 peaches

- 2) Calculate the difference in mass between:

a)

1 apple and 7 strawberries	1 apricot and 5 blueberries	95g
----------------------------	-----------------------------	-----

b)

3 bananas and 3 apricots	2 strawberries and 3 peaches	220g
--------------------------	------------------------------	------

c)

4 apricots and 3 peaches	4 apples and 7 blueberries	65g
--------------------------	----------------------------	-----